

LEZIONE DI MATEMATICA MAESTRA IANNONE I A

LEZIONI online

TROVERAI VARI VIDEO ai seguenti link

1. La sottrazione

<https://www.youtube.com/watch?v=MT5Zvjk3ByI>

2. La sottrazione

https://www.youtube.com/watch?v=EIVqNdb2Z_U

3. La sottrazione

<https://www.youtube.com/watch?v=mfzZM-oEALU>

4. Le decine

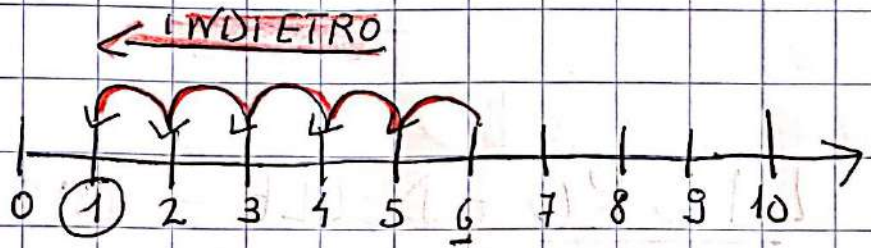
<https://www.youtube.com/watch?v=YaZpwXx7UD8>

5. Come risolvere un problema

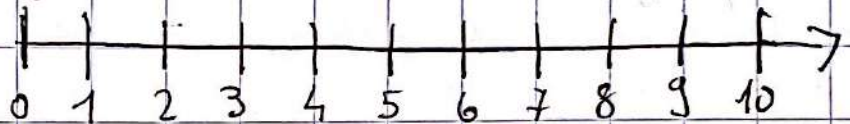
https://www.youtube.com/watch?v=zf28Lg_5428

Esegui sulla linea dei numeri?

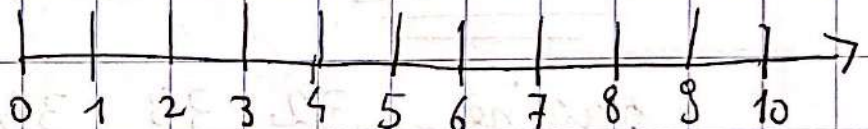
$$6 - 5 = 1$$



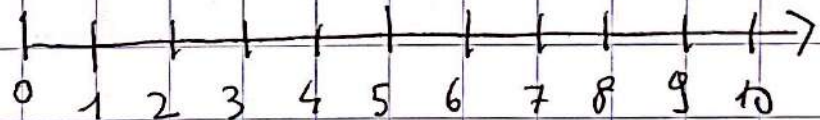
$$9 - 3 =$$



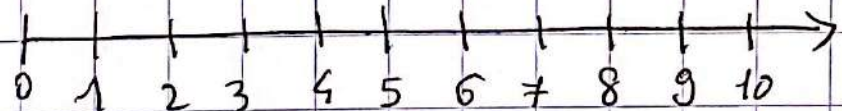
$$7 - 4 =$$




$$8 - 3 =$$



$$5 - 4 =$$

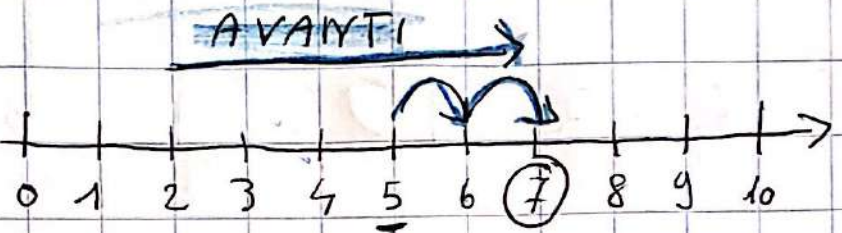


$$9 - 8 =$$

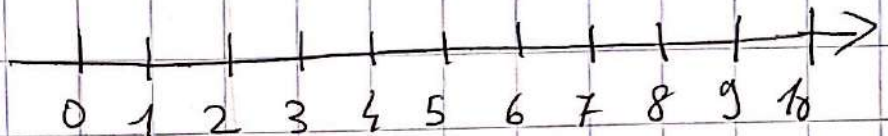


Esegui sulla linea dei numeri.

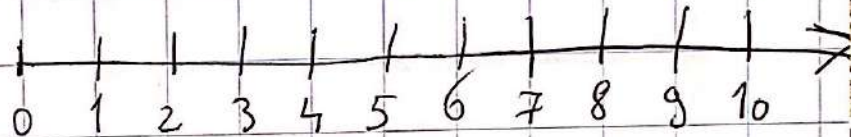
$$5 + 2 = 7$$



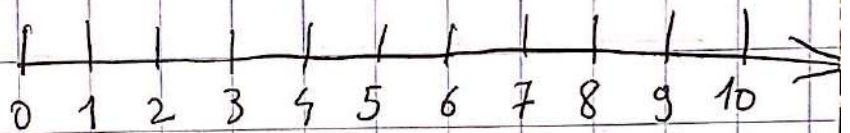
$$4 + 5 =$$




$$8 + 2 =$$




$$3 + 6 =$$



$$2 + 5 =$$



$$4 + 6 =$$




Calcola con l'abaco.


$7 + 3 = 10$



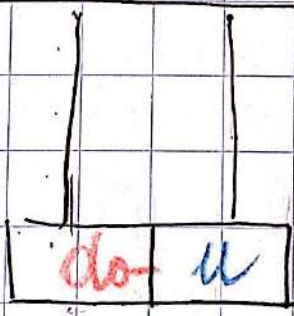
$5 + 3 =$




$4 + 2 =$



$3 + 5 =$




$7 + 0 =$




Calcola con l'abaco.

$$9 - 3 = 6$$




$$6 - 4 =$$



$$9 - 5 =$$



$$6 - 3 =$$



$$8 - 6 =$$



Problema

Fred disegna 6 cuori blu e

4 cuori rossi.

Quanti cuori ha disegnato

Fred in tutto?

DATI:

4 → rossi

6 → blu

Risolvere

Disegno

operazione

Rispondo

FORMARE IL 10

1 CONTINUA A COLORARE I QUADRATINI E COMPLETA.



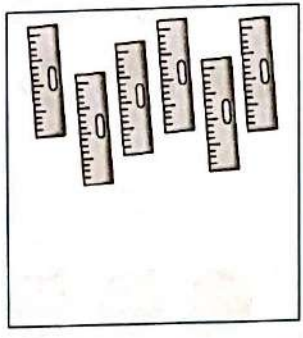

COLORATI

BIANCHI

10	
9	
.....	
.....	
.....	
.....	
.....	
.....	
.....	
.....	
.....	
.....	
.....	
.....	
.....	

0	$10 + 0 = 10$
1	$9 + 1 = 10$
.....	$8 + \dots = \dots$
.....	$\dots + \dots = \dots$
.....	$\dots + \dots = \dots$
.....	$\dots + \dots = \dots$
.....	$\dots + \dots = \dots$
.....	$\dots + \dots = \dots$
.....	$\dots + \dots = \dots$
.....	$\dots + \dots = \dots$
.....	$\dots + \dots = \dots$
.....	$\dots + \dots = \dots$

2 QUANTI SONO? AGGIUNGI PER AVERE SEMPRE 10.



3 DISEGNA 10 PERLE SULLA COLLANA.



1 SCRIVI IL NUMERO PRECEDENTE.



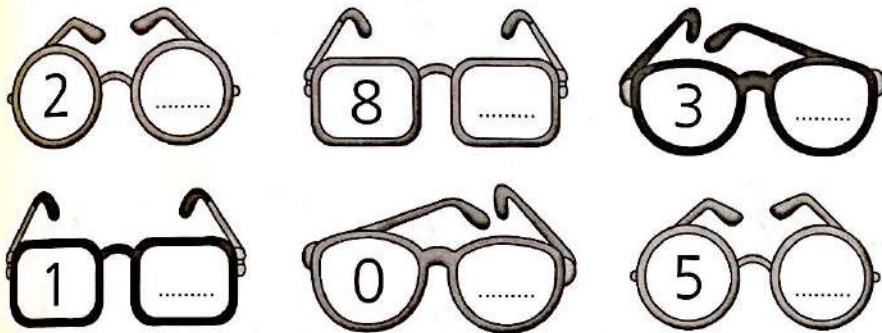
MEMO

PRECEDENTE
È IL NUMERO
CHE VIENE
SUBITO PRIMA.

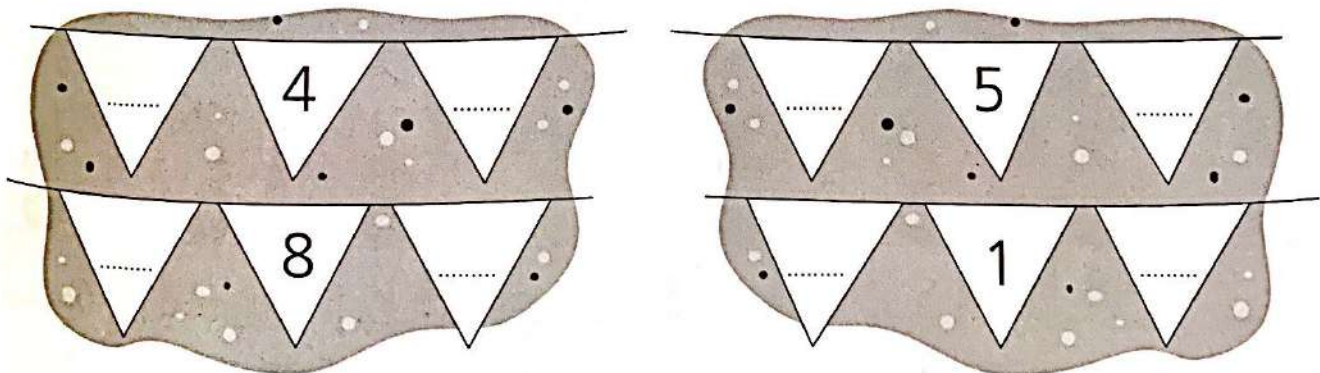


SUCCESSIVO
È IL NUMERO
CHE VIENE
SUBITO DOPO.

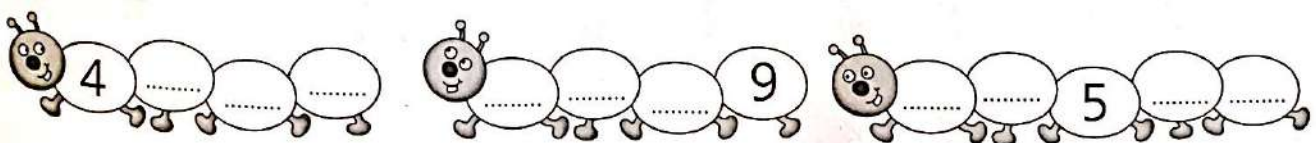
2 SCRIVI IL NUMERO SUCCESSIVO.



3 SCRIVI IL NUMERO PRECEDENTE E IL SUCCESSIVO.



4 COMPLETA I BRUCHI CON I NUMERI.



COMPITI DI MATEMATICA

INS. IANNONE MARIA

Eseguire i seguenti esercizi:

- sul libro delle discipline: pag. 48,49,50,51
- sul quaderno delle discipline: pag. 32, 33, 34, 36, 37

1. Gli esercizi allegati in pdf sono da ricopiare ed eseguire su un quaderno nuovo.